



INDIAN SCHOOL AL WADI AL KABIR
DEPARTMENT OF MATHEMATICS (2022 – 2023)

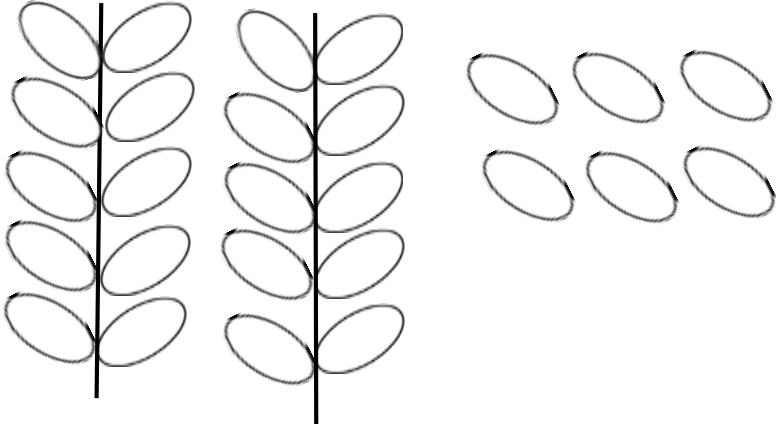

TOPIC: NUMBER CONCEPTS (Tens and Ones)

WORKSHEET - 11

RESOURCE PERSON: SUNITA S BHADRA

NAME: _____ CLASS: I SEC: _____ DATE: _____

Count and write as Tens and Ones.

a.  = 

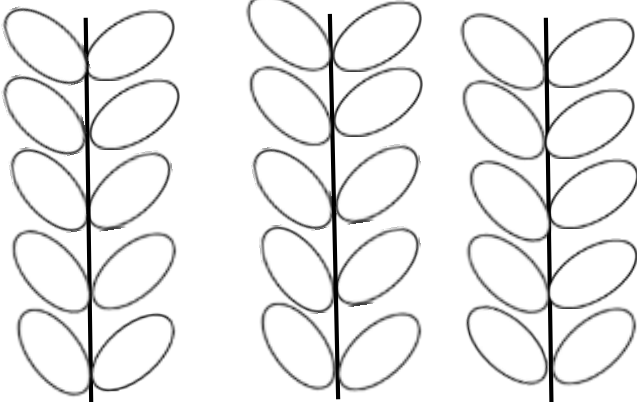

T O

26 = _____ tens and _____ ones

= _____ + _____

= _____

= Twenty Six

b.  = 

T O

30 = _____ tens and _____ ones

= _____ + _____

= _____

= Thirty